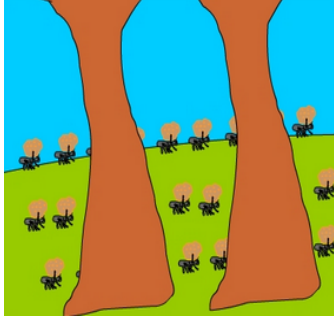


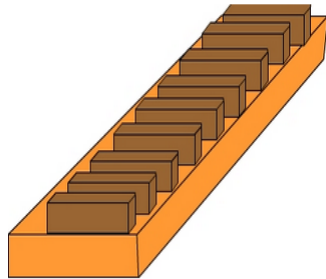
Multiplication facts - 9's: Activity 1

- 1 3 rows of 9 ants carried food back to their nest. How many ants altogether carried food back to their nest?




A: 27

- 3 There are 9 biscuits in each packet. Mrs Harper needed 4 packets to give each of her students 1 biscuit. How many students in Mrs Harper's class?



A: 36

- 5 There are 9 offices on each of the 5 stories of this building. What is the total number of offices in the building?



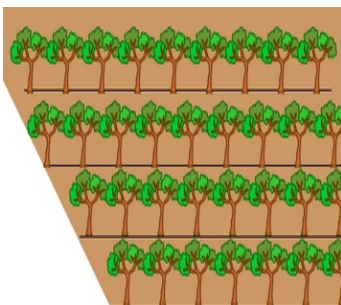
A: 45

- 7 Beth placed 9 teaspoons of sugar in each of 3 bowls. How many teaspoons of sugar altogether?



A: 27

- 9 On the plantation the trees are planted in rows of 9. How many trees in 4 rows?



A: 36

- 2 Each truck in the fleet needs 9 new wheels. If there are 6 trucks in the fleet, how many new wheels are needed?




A: 54

- 4 Liz bought TWO of each \$9 dress. How much did she spend on the dresses?



A: 36

- 6 Each cow shown produced 9 L of milk. What is the total volume of milk produced by the 4 cows?



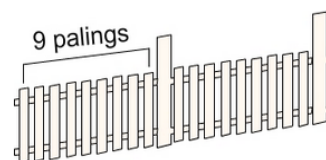
A: 36

- 8 For their performance the dancers received a score of 9/10 from each of the six judges. What is their total score out of 60?



A: 54

- 10 Each section of the fence has 9 palings. Kim needs to paint 11 sections of the fence. How many palings does Kim need to paint?



A: 99