


$10 - 2 =$



Cross out the amount then write the answers


$10 - 4 =$



$10 - 8 =$




$10 - 2 =$



$10 - 6 =$



$10 - 7 =$



$10 - 0 =$



$10 - 9 =$



$10 - 3 =$



$10 - 5 =$



$10 - 10 =$

