


Mass

Name:

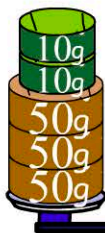
Date:

1. What's the total weight of the tower?




- 110 grams 10 grams
 100 grams 50 grams

2. What's the weight of the apple?



weight = grams

3. Which item weighs more than 1kg?



4. Greg is 8 years old. His weight is most likely:

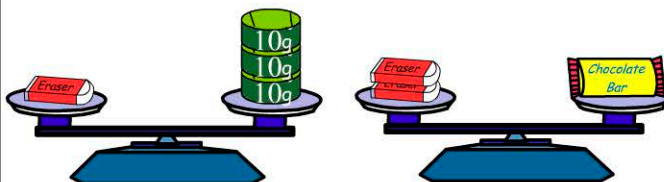
- 3kg 125kg
 18kg 708kg

5. How much does the bucket of water weigh?



- 5kg
 7kg
 9kg
 11kg

= 10 grams



6. How much does the eraser weigh?

- 10g 30g
 20g 40g

7. What's the weight of the chocolate bar?

- 30g 50g
 40g 60g

8. What's the total weight?



- 60g 100g
 80g 120g

9. How many 50g weights are needed to equal 1 kg?

10. One strawberry weighs 10g. How much do 10 strawberries weigh?



grams