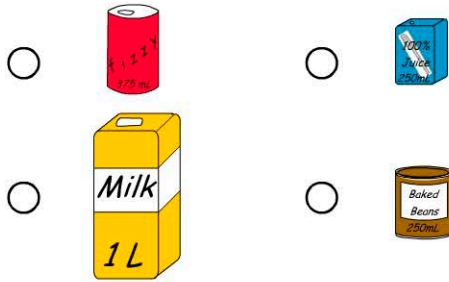


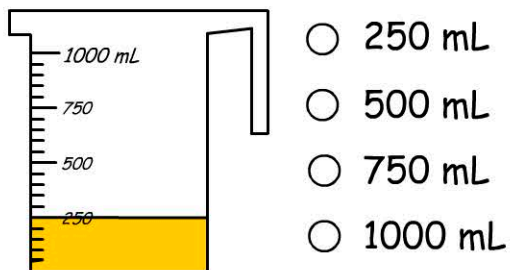
Name:

1. Which container holds 1 litre?

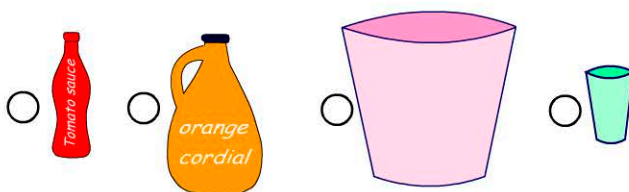


2. 1 litre = millilitres

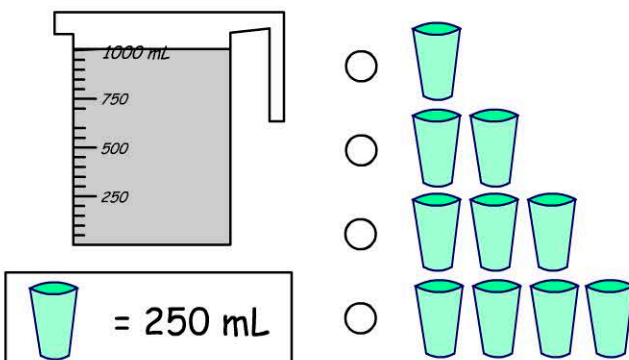
3. How much soup is in the jug?



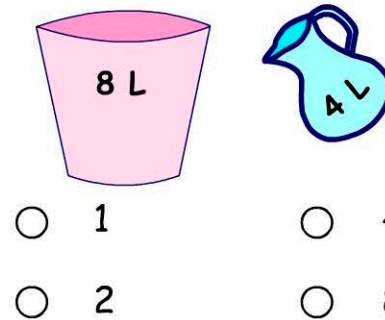
4. Which container holds more than 5 L?




5. How many glasses of water were used to fill the jug?



6. How many jugs of water are needed to fill the bucket?



7.

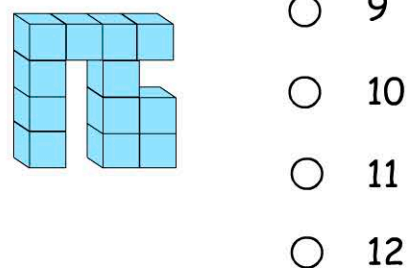
If  = 250 mL



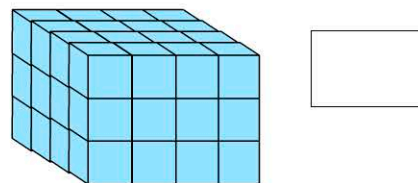
What's the capacity of the bowl?



8. How many cubes in this model?



9. How many cubes were used to build the rectangular prism?



10. How many mL in $\frac{1}{2}$ L?

