

Name: _____

Telling the Time

Match each time with the correct clock.









8 o'clock



10 o'clock



1 o'clock



4 o'clock



6 o'clock



7 o'clock