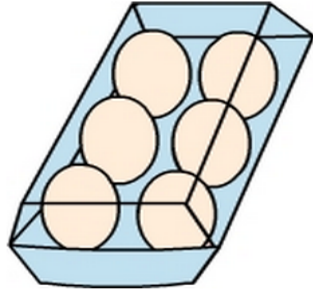



# Multiplication facts - 6's

- 1 There are 6 eggs in each carton. Yeng bought 4 cartons of eggs. How many eggs did Yeng buy?



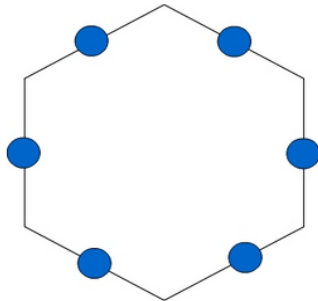
A:

- 3 There are 6 students in each group. If there are 5 groups, how many students altogether?



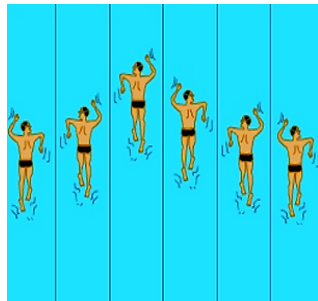
A:

- 5 Robin drew 3 hexagons. She placed a counter on each side of the hexagon as shown in the picture. How many counters did she use?



A:

- 7 There are 6 competitors in each heat. If there are 10 heats, how many competitors altogether?



A:

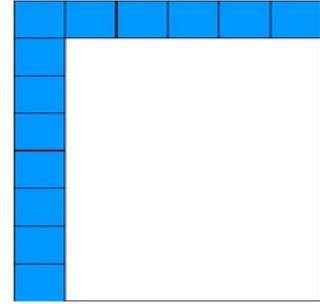
- 9 What number is needed to make the sentence true?

$3 \times 4$   
is the same as  
 $\square \times 6$




A:

- 2 Shown is an incomplete tile design placed on a piece of paper. How many tiles in total will completely cover the piece of paper?



A:

- 4 A fly has 6 legs (like all insects). How many legs in total have 7 flies?



A:

- 6 Each lap of the course is 6 km. Harry completed 8 laps. What is the total distance he rode?



*1 lap = 6 km*

A:

- 8 There are 6 tomatoes in each basket. How many tomatoes in 8 baskets?



A:

- 10 Each carton fills 6 glasses with milk. How many glasses can be filled with 5 cartons?



A: