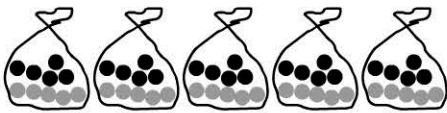


# Groups of 10



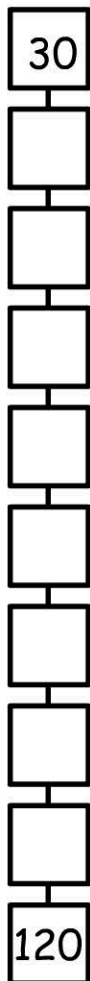
How many lollies altogether? \_\_\_\_\_

5 groups of 10 = \_\_\_\_\_

9 groups of 10 = \_\_\_\_\_

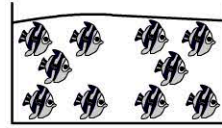
7 groups of 10 = \_\_\_\_\_

Count by 10's - Start at 30.



## Working Mathematically

1)



There are 10 fish in each tank.  
How many fish in 8 tanks? \_\_\_\_\_

2) 12 groups of 10 = \_\_\_\_\_

3) 15 groups of 10 = \_\_\_\_\_

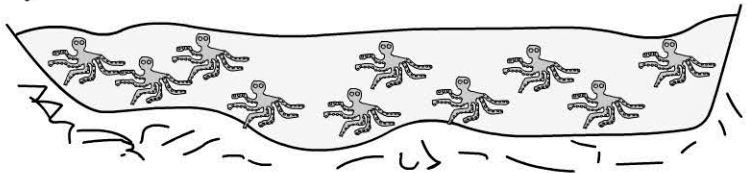
4)



lolly bag

Jack wants a lolly bag for 7 of his friends. How many lollies does he need? \_\_\_\_\_

5)



Each pool has 10 octopuses.  
There are 90 octopuses altogether.  
How many pools are there? \_\_\_\_\_

- 7 pools
- 8 pools
- 9 pools
- 10 pools