

Two digit subtraction II

- 1 There are 97 students staying at a camp site. 38 are boys. How many girls?




A: 59

- 3 There are 76 guests at a party. 27 are adults and the rest are children. How many children at the party?



A: 49

- 5 The ship took 80 days to complete 2 legs of its journey. It took 69 days for the first leg of the journey. How long did the second leg of the journey take?



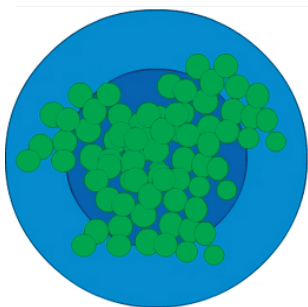
A: 11

- 7 There are 94 students waiting for a bus. 74 students get on the first bus and the rest wait for the second. How many students wait for the second bus?




A: 20

- 9 There are 64 peas on Justin's plate. After eating 46 peas, how many peas left on Justin's plate?



A: 18

- 2 There are 66 rabbits in a pen. One afternoon 36 rabbits escape. How many rabbits left in the pen?




A: 30

- 4 Santos collected 85 shells over the week-end. If he collected 46 on Saturday, how many shells did he collect on Sunday??




A: 39

- 6 Theo has 96 stamps. He gives 27 stamps to Lena. How many stamps does Theo have left?



A: 69

- 8 Gretel saved \$57. She then spent \$18 on a toy. How much does Gretel have left?



A: 39

- 10 Khadija painted a picture of a farm which took 45 minutes and a picture of her family which took 25 minutes. How much longer did it take to paint the farm?



A: 20