


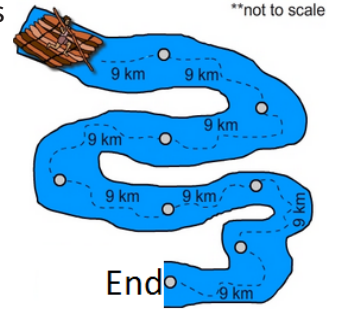
Multiplication facts - 9's: Activity 2

- 1 At the camp site there are 9 people in each tent. If there are 7 tents, how many people at the camp site?



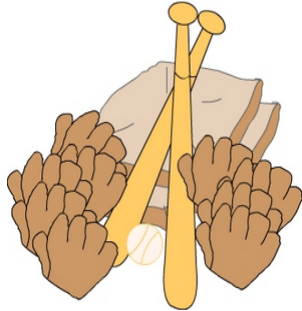
A: 63

- 2 Each of the eight stages of the raft race is 9 km long. How far is the entire race?



A: 72

- 3 There are 9 players on each softball team. If there are 6 games (two teams per game) taking place, how many people playing?



A: 108

- 4 What is the missing number?


$$2 \times 45 = 90$$

$$2 \times 45 = _ \times 9$$



A: 10

- 5 The printer shown prints 9 pages per minute. How many pages can it print in 12 minutes?




A: 108

- 6 The event requires every competitor to complete 7 laps of the 9 km course. What is the total distance ridden by each competitor?



A: 63

- 7 Andy is using small tiles to cover a piece of blue paper. How many tiles are needed to cover the paper?




A: 81

- 8 Six 9 kg boxes are stacked on top of one another. What's the total weight of the stack of boxes?



A: 54

- 9 8 full buckets of water are poured into an empty drum. If the bucket's capacity is 9 L, how much water is in the drum?



A: 72

- 10 The table shows the number of hours Quang worked last week. How many hours did Quang work last week from Friday to Sunday?

Hours worked each day

Day	Hours
Monday	6
Tuesday	7
Wednesday	4
Thursday	8
Friday	9
Saturday	9
Sunday	9

A: 27