



Groups of four

1 How many dots altogether?




A: 4

2 How many dots altogether?



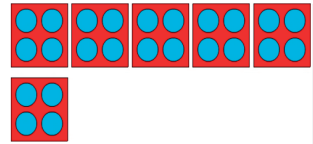
A: 32

3 How many dots altogether?




A: 28

4 How many dots altogether?




A: 24

5 How many dots altogether?




A: 20

6 How many dots altogether?



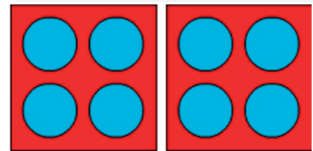
A: 16

7 How many dots altogether?




A: 12

8 How many dots altogether?




A: 8

9 How many dots altogether?



A: 36

10 How many dots altogether?



A: 40