


- 1 The total weight of 8 concrete blocks is 88 kg. What's the weight of each block?




A:

- 3 In the question challenge there are 48 questions divided into 8 equal parts. How many questions in each part?



A:

- 5 8 shirts cost \$32 to buy. How much will 10 shirts cost to buy?




A:

- 7 The contents from a full 24 L drum are poured equally into 8 jugs. How much liquid is in each jug?



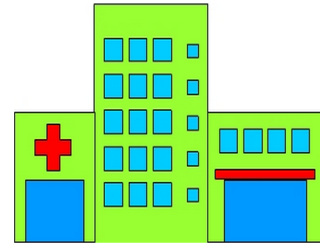
A:

- 9 Jane gives each chicken the same number of seeds. She has 96 seeds to feed the chickens, how many seeds does each chicken get?



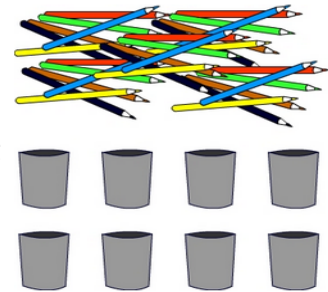
A:

- 2 SL Memorial Hospital has 8 wards. There are the same number of beds in each ward. If there is a total of 64 beds, how many beds in each ward?



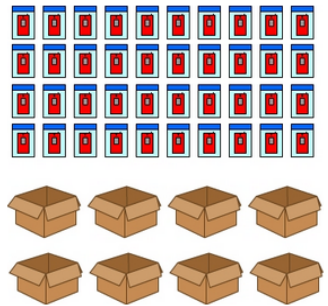
A:

- 4 There are 56 pencils on a table. Ali is asked to place an equal number of pencils in each tin. How many pencils must Ali place in each tin?



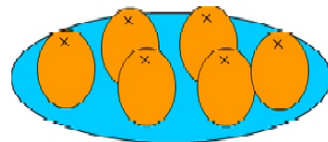
A:

- 6 For distribution to stores, 40 phones are packaged equally into 8 boxes. How many phones need to be placed into each box?



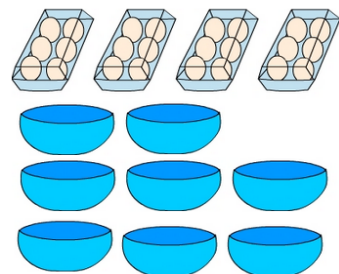
A:

- 8 6 oranges are cut into quarters. The quarters are then shared between 8 people. How many quarters does each person get?



A:

- 10 Divide the number of eggs shown in the picture, equally, into 8 bowls. How many eggs go in each bowl?



A: