

Name: \_\_\_\_\_

1)  $6 \times (5 + 4) =$

2)  $8 + 3 \times 5 =$

3)  $15 + 25 \div 5 =$

4)  $(10 + 6) \times (4 + 6) =$

5)  $5 \times (4 + 5) - 10 =$

6)  $30 - 10 \times 2 =$

Fill in the missing numbers.

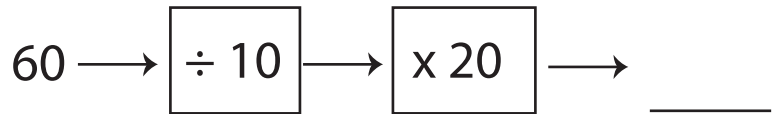
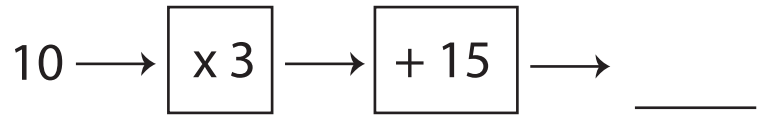
7)  $6 \times 5 = 3 \times$  \_\_\_\_\_

8)  $30 -$  \_\_\_\_\_  $= 63 \div 7$

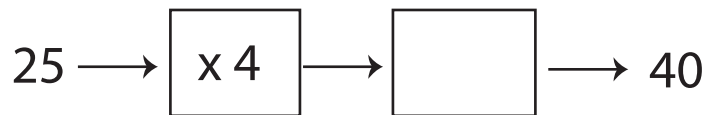
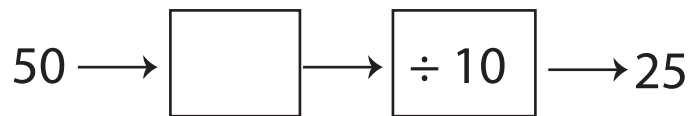
9)  $60 \div$  \_\_\_\_\_  $= 3 \times 4$

10)  $6 \times 8 = 8 + (8 \times$  \_\_\_\_\_)

11) Calculate the output after each set of calculations.



12) Enter the missing calculation to achieve the correct output.



13) If six tennis balls cost £6.60, what is the cost of 8 tennis balls?

14) Construct three number sentences.

For each number sentence, you can't use the same number twice.

a) \_\_\_\_\_  $\times$  \_\_\_\_\_  $=$  \_\_\_\_\_  $\times$  \_\_\_\_\_

b) \_\_\_\_\_  $\div$  \_\_\_\_\_  $=$  \_\_\_\_\_  $+$  \_\_\_\_\_

c) \_\_\_\_\_  $-$  \_\_\_\_\_  $=$  \_\_\_\_\_  $\div$  \_\_\_\_\_