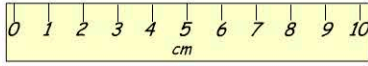


Name:

line A _____
line B _____
line C _____



1. How long is line A?

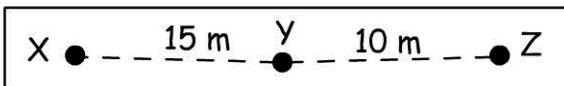
- 6 cm 8 cm
 7 cm 9 cm

2. Line B is 3 cm longer than line A.

How long is line B? cm

3. If line C was cut in half, how long will it be?

- 2 cm 4 cm
 3 cm 5 cm



4. How far from point X to point Z?

- 22 m 25 m
 26 m 27 m

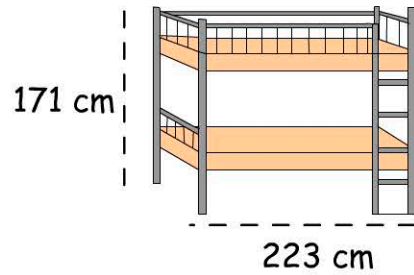
5. Sam walked from point X to point Z then back to point Y. How far did he walk?

- 25 m 35 m
 30 m 50 m

6. What is the difference in length between the two lines?



- 4 cm 3 cm
 7 cm 2 cm



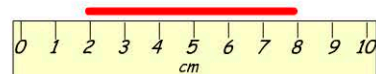
7. What's the height of the bed?

- 1 m 17 cm 1 m 7 cm
 1 m 71 cm 2m 17 cm

8. What's the length of the bed?

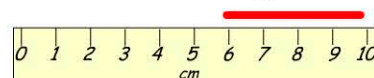
- 1 m 300 cm 1 m 13 cm
 2 m 03 cm 2m 23 cm

9. What's the length of the line?



cm

10. If this line is joined to the line in question 9, how long will it be?



cm