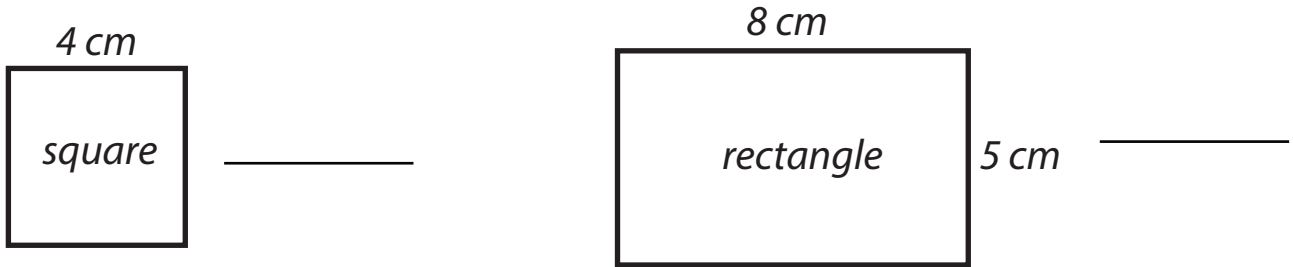


Name: _____

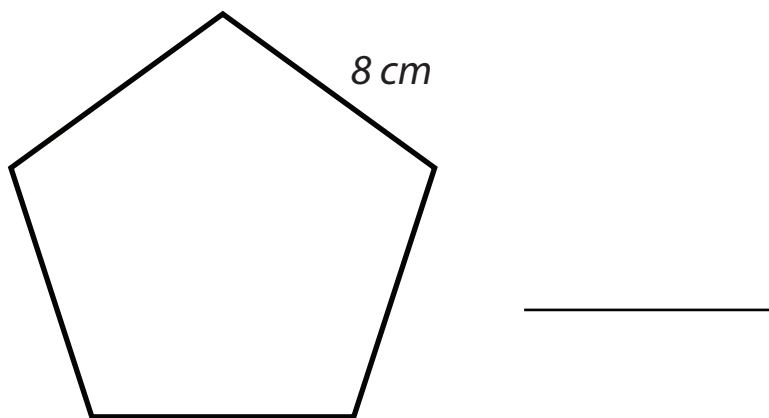
***The shapes are not drawn to scale.*

1) Calculate the perimeter of the square and rectangle.



2) Draw a square and a rectangle, each with a perimeter of 16 cm. Label the length of each side.

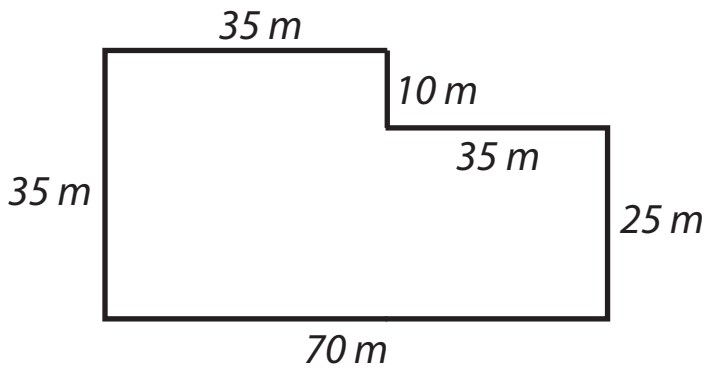
3) A regular pentagon has five equal sides. Calculate the perimeter of this regular pentagon.



4) A regular pentagon with 12 cm sides will have the same perimeter as a square with _____ sides.

Name: _____

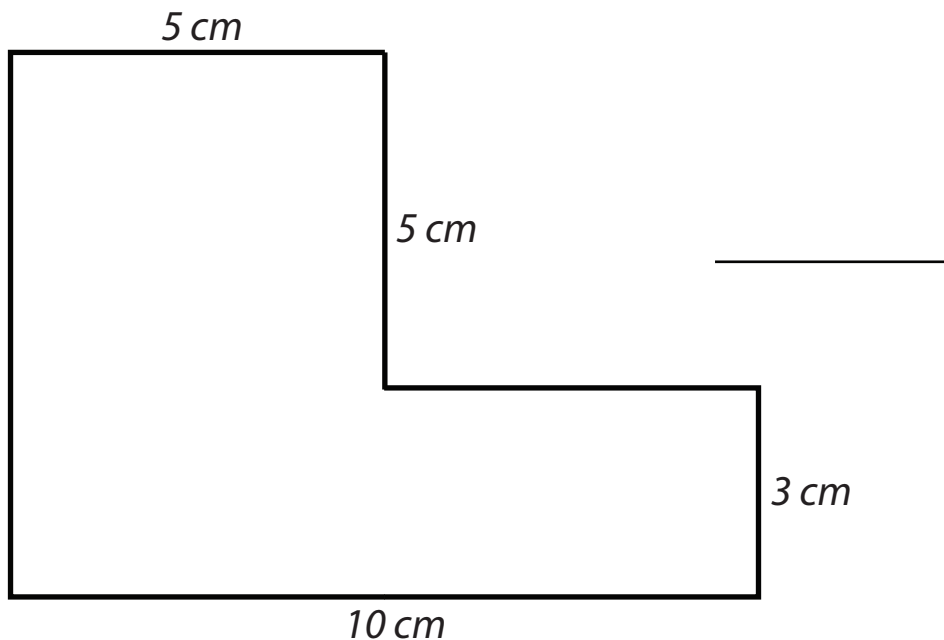
5) This is an outline of Jill's property.



a) What is the perimeter of Jill's property? _____

b) What is the cost to build a fence around the entire property if fencing costs £20/m? _____

6) Calculate the perimeter of this shape.



7) A regular hexagon has a perimeter of 36 cm. What is the length of each side? _____

8) An equilateral triangle has a perimeter of 36 cm. What is the length of each side? _____