

Data & Graphs

Name:

Date:

Maths results

James	86	75	91
Liam	68	77	83
Shelley	92	89	88

1. Which student has the highest score thus far?

- James Liam
 Shelley Pia

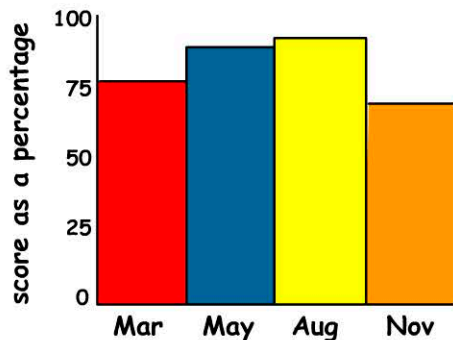
2. What is Liams' worst score?

is Liams' worst score.

3. What is James' best score?

- 80 91
 82 95

English Results for Angus James



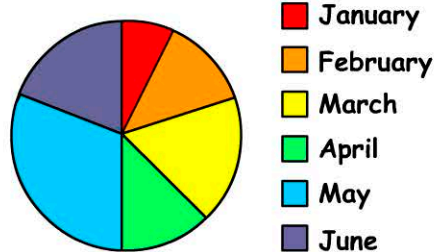
4. In which month did Angus achieve his best result?

- August May
 November March

5. The difference between Angus' best and worst result is about?

- 10 40
 5 20

Amount raised each month



6. Which was the most successful month?

- January March
 May June

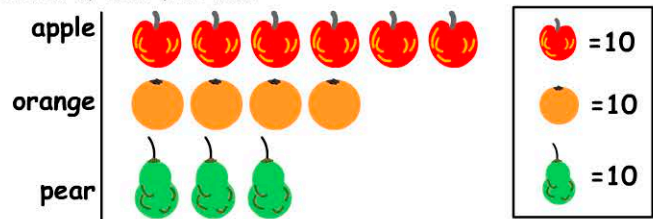
7. In June and which other month was £250 raised?

- March April
 February May

8. If £160 was raised in April, how much was raised in January?

- £320 £250
 £140 £80

Crates of each fruit sold



9. How many crates of apples were sold?

10. How many crates of fruit were sold?