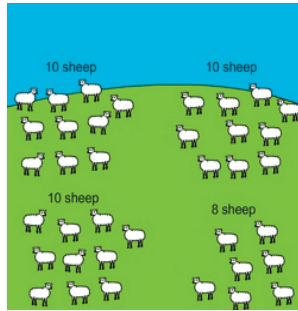



Place value 100 - concepts

- 1 There are 3 groups of 10 sheep and 1 group of 7 sheep. How many sheep altogether?




A: 37

- 2 There are 10 seagulls on each wall and 4 seagulls standing on the ground. How many seagulls altogether?



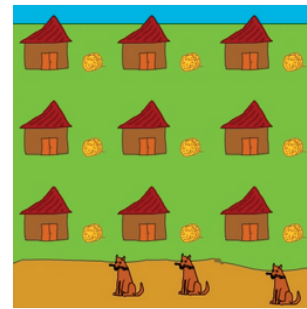
A: 24

- 3 There are 10 seagulls on each wall and 9 seagulls standing on the ground. How many seagulls altogether?




A: 29

- 4 On Sue's farm there are 10 cows in each barn plus her 3 dogs. How many animals on the farm?




A: 93

- 5 There are 10 pieces of fruit in each bowl plus the pieces of fruit on the table. How many pieces of fruit altogether?



A: 56

- 6 There are 10 pieces of fruit in each bowl. How many pieces of fruit on the table?



A: 54

- 7 What number of shots were taken from Monday to Friday?




Shots taken

Mon	Tues	Wed	Thurs	Fri	Sat
10	10	10	10	10	9

A:

- 8 At the campsite there are 10 people sleeping in each cabin and 2 people sleeping in the tent. How many sleeping altogether?



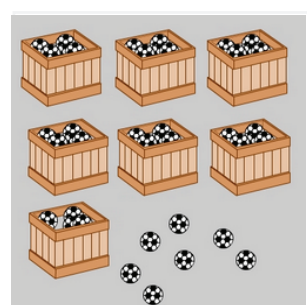
A:

- 9 There are 10 balls in each trolley and 4 balls on the ground. How many balls altogether?



A:

- 10 There are 10 balls in each crate and 7 balls on the ground. How many balls altogether?



A: