


4 x multiplication facts

- 1 Heidi saved \$4 per week. How much did she save in 8 weeks?



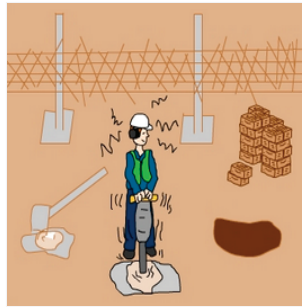
A: 32

- 2 Sam swam 4 km each day. What is the total distance he swam in 7 days?



A: 28

- 3 Theo worked for 4 hours a day for an entire week (Mon-Sun). How many hours did he work in the week?



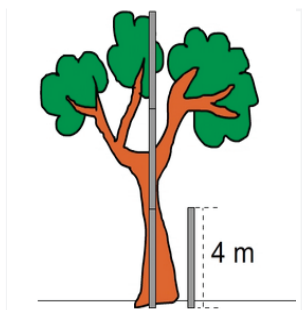
A: 28

- 4 Four, 4 kg boxes are stacked on top of one another as shown in the picture. What is the total weight of the stack?



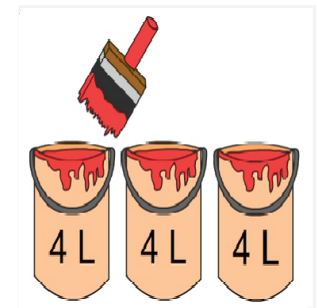
A: 16

- 5 Three, 4 m poles placed end to end are the same height as the tree. What is the height of the tree?




A: 12

- 6 Each tin contains 4 L of paint. How much paint in 3 tins?




A: 12

- 7 If 9 sandwiches are cut into quarters. How many quarters are there altogether?




A: 36

- 8 Andrew cut 11 oranges into quarters. How many quarters does Andrew have altogether?



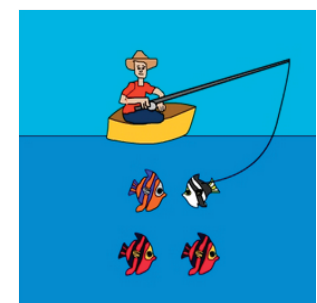
A: 44

- 9 Each tin contains 4 balls. A tennis school bought 9 tins of balls. How many balls did the tennis school buy?



A: 36

- 10 Jed caught 4 fish every hour for 7 hours. How many fish did he catch?



A: 28