

Multiplying by 10 or 100: Activity 2

- 1 100 sweets are made every minute, 24 hours a day, seven days a week. How many sweets are made in a week (7 days = 10080 minutes)?



A: 1008000

- 3 Each crate weighs 94 kg. What is the TOTAL weight of the truck's load that comprises of 100 crates? Answer in kilograms.




A: 9400

- 5 Jack planted 45 rows of lettuces. He planted 100 lettuces in each row. How many lettuces did he plant?



A: 4500

- 7 4469 people made 10 paper cranes each. How many paper cranes did they make altogether?



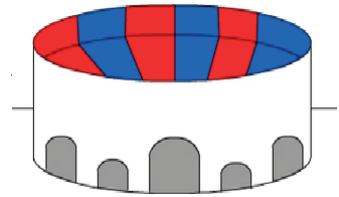
A: 44690

- 9 A company needs to buy 100 new computers for its staff. What will be the total cost if each computer costs \$747?



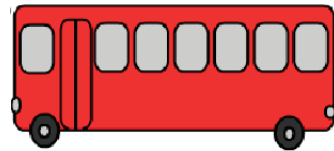
A: 74700

- 2 The stadium has 925 seats in each section. If there are 100 sections, how many seats in the stadium?




A: 92500

- 4 The bus shown has a seating capacity of 63 passengers. What is the maximum number of seated passengers 10 bus loads can carry?



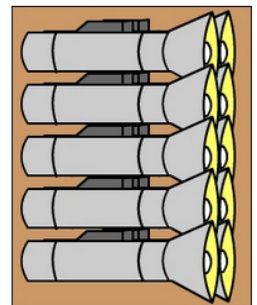
A: 630

- 6 The plane burns *8604 L of fuel an hour. How much fuel is burnt on a 10 hour flight? (*8604 L - on average)



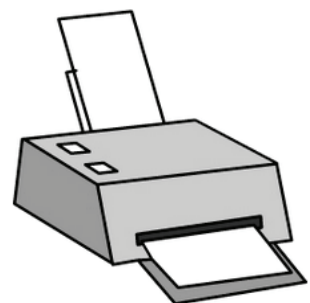
A: 86040

- 8 SL manufacturing make 1640 torch packs a month with 10 torches in each pack. How many torches do they make in a month?



A: 16400

- 10 The printer shown can print 180 pages per hour. How many pages can it print in 10 hours?



A: 1800