


## Multiplication facts - 5X

- 1 In the pond there are 8 lily pads. On each lily pad there are 5 frogs. How many frogs in the pond?




A: 40

- 2 For the school photo the children stood in 6 lines with 5 children in each line. How many children in the photo?



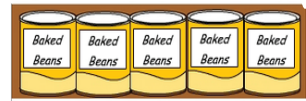
A: 30

- 3 There are 5 balls in each basket. How many balls in 6 baskets?



A: 30

- 4 Each box has 5 cans of beans. How many cans of beans in 7 boxes?




A: 35

- 5 To paint his house Andrew worked for 5 hours each day. If it took 9 days, how many hours did it take Andrew to paint his house?



A: 45

- 6 Dan collected 5 shells a day for 4 days. How many shells did Dan collect altogether?




A: 20

- 7 Sarah goes to school 5 days a week. How many school days in 9 weeks?



A: 45

- 8 Each container has 5 brushes. If there are 8 containers, how many brushes altogether?



A: 40

- 9 In my class there are 6 reading groups with 5 children in each group. How many children in my class?



A: 30

- 10 James can see 3 groups of 5 ants walking together. How many ants can he see?



A: 15